

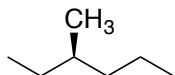
Quiz 1 (Wednesday afternoon)

Name:

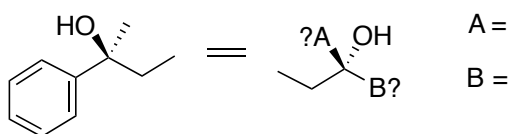
Recitation Instructor:

*The following quiz is 20 points. You have 20 minutes to complete it. Good Luck!*

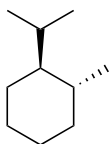
1. Provide a name for the following molecule, making sure to designate (R) or (S) (5 points)



2. Finish redrawing the following molecule (5 points)



3. Draw the following molecule in an appropriate chair conformation? (5 points)



4. Redraw the following Newman Projection in the lowest energy state (5 points)

